

Sri Swami Vivekananda Talent Test - 2015

School Level (Level -1) Classes 6th and 7th

Conducted by : T.S.O. (Talent Search Organisation – P.Dornala)

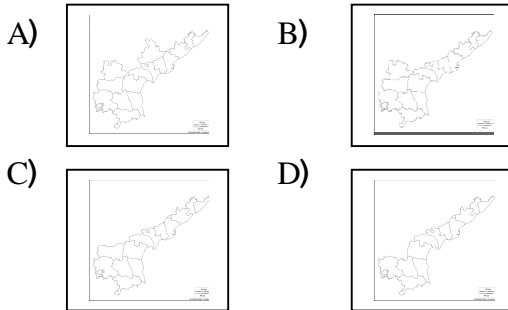
Date: 02-01-2015 Venue:, P.Dornala

GENERAL INTELLIGENCE


01. Which is heavier either one kilo of Iron or one kilo of Cotton?
A) Iron B) Cotton
C) both are equal D) we can't say

02. Vowels in Telugu language and their order
A) అ అ ఇ ఋ ఉ ఌ ఋ ఌ ఎ ఏ ఐ ఔ
B) అ అ ఇ ఋ ఉ ఌ ఋ ఌ అం అః
C) అ అ ఇ ఋ ఉ ఌ ఋ ఌ ఎ ఏ ఐ ఔ
D) అ అ ఇ ఋ ఉ ఌ ఎ ఏ ఐ అం అః

03. Latest Andhra Pradesh Out line map



04. Writer of “Desamunu Preminchumanna”



05.

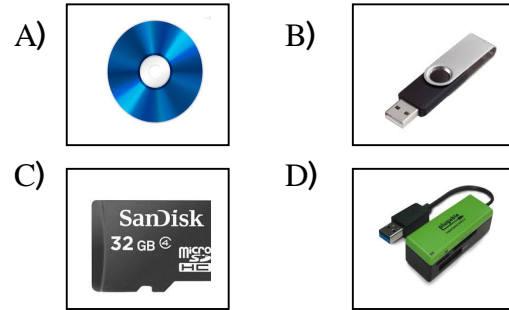


- A) Bird B) Mammal
C) Insect D) Reptile

06. Two cats takes 2 minutes time to eat 2 rats.
How many minutes can four cats take to eat

- 4 rats
A) 4 B) 20
C) 8 D) 2

07. Pen Drive



08. The first small letter in English Alphabet
uses in Printing.

- A) A B) a
C) a D) A

09. 1 = 5, 2 = 10, 3 = 15, 4 = 20 then 5 = ?

- A) 30 B) 25
C) 50 D) 1

10. Works:

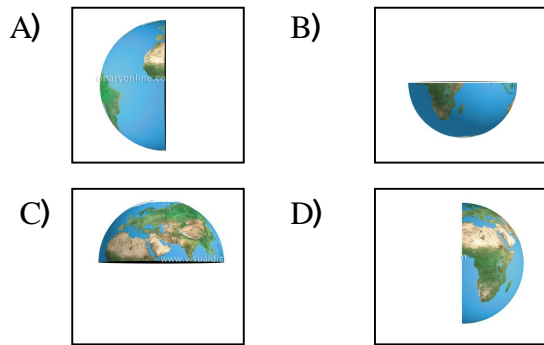
1. Face wash
2. Hand wash
3. Take water
4. Wash legs

You come to home after running on sunny day. Preferable order of works

- A) 3-4-2-1 B) 1-2-4-3
C) 4-2-1-3 D) 1-3-2-4

SOCIAL STUDIES

11. Northern Hemi Sphere of the Earth



12. Equator of earth is a

- A) Circle B) Semi circle
C) Straight line D) Square

13. Nearest sea to us

- A) Arabian B) Bay of bengal
C) Pacific D) Hindu

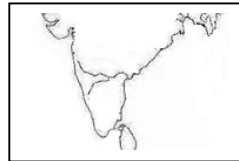
14. The state in first place production of rice in india

- A) Maharashtra B) West Bengal
C) Odissa D) Andhra Pradesh

15. International Ozone day

- A) September 16 B) October 2
C) March 8 D) June 5

14.



Identify the river

Given in the map

- A) Godavari B) Krishna
C) Ganga D) Kaveri

17.discovered the way to India by Sea

- A) Columbus B) Vosco d gama
C) James cook D) Captain Cook

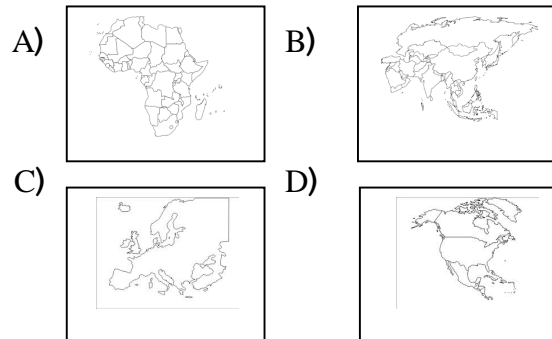
18. Who built Taj Mahal?

- A) Akbar B) Shajahan
C) Kuli Kutub shah D) SrikrishnaDevaraya

19. This country was not in the border of India

- A) China B) Russia
C) Nepal D) SriLanka

20. Efil Tower is in continent.



GENERAL SCIENCE

21. Not a reptile

- A) Lizard B) Snake
C) Crocodile D) Frog

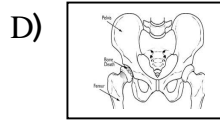
22. Not an Herbivore

- A) Giraffe B) Goat
C) Bear D) Buffalo

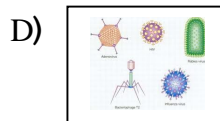
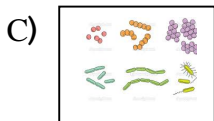

23. Percentage of Carbon di oxide in Air

- A) 0.3% B) 0.03%
C) 0.003% D) 0.33%

24. Rib Cage in Human body



25. Amoeba



26. This is used in Fire Extinguisher

- A) Oxygen B) Hydrogen
C) Nitrogen D) Carbon di oxide

27. If we cut the magnet in the middle

- A)

N	S
---	---

 B)

S	N	N	S
---	---	---	---

C)

S	N	S	N
---	---	---	---

 D)

N	S	S	N
---	---	---	---

28. Vitamin – C is not presented in

- A) Carrot B) Pumpkin
C) Tomato D) Milk

29. Number of partitions in Human heart

- A) 2 B) 3
C) 4 D) 5



- A) Solar Eclipse B) Lunar Eclipse
C) both A & B D) None of the above

ENGLISH GRAMMAR

31. Ramu a pet dog.
A) have B) is having
C) has D) is have
32. The Shines in the East.
A) Son B) Soon
C) Sun D) Sin
33. Kamala's pet cat is very
A) Beautiful
B) Handsome
C) Pretty
D) Beautiful/Handsome
34. Children are very fond Sweets.
A) to B) of
C) for D) with
35. The chair is made Plastic.
A) in B) of
C) with D) from
36. Which is correct
A) HM sir B) Head master
C) Head master sir D) HM master
37. To make sounds and movements of your face that show you are happy...
A) smile B) laugh
C) snicker D) titter
38. Select the wrongly spelt word
A) Independance day
B) Republic day
C) Anniversary day
D) wedding day

39. Choose the correct sentence

- A) I go to the school, every day
- B) I am going to school, every day
- C) I go to school, every day
- D) I goes to school, every day

40. Pen + Pencil

- A) pen or pencil B) pen and pencil
- C) both A & B D) None of the above

HISTORY OF VIVEKANANDA

41. Mother of Swami Vivekananda

- A) Rajeswari B) Bhuvaneswari
- C) Saraswathi D) Chandra bai

42. Vivekananda was not interested in ...

at his childhood

- A) English B) Country history
- C) Sanskrit D) Mathematics

43. Golden watch to Vivekananda was gifted by

- A) Mysore Maharaj B) Trilinga swami
- C) Pawahari baba D) Ramatirtha Swami

44. Sri Rama Krishna Math is located in ...

- A) Beluru B) Eluru
- C) Nellore D) Vijayawada

45. First name of Vivekananda

- A) Narendrudu B) Visweswarudu
- C) Bile D) Ananda Swami





46. "Eka santha Grahi " means

- A) Fast learner
- B) A man who learns with one stroke
- C) Polite man
- D) Man with dare

47. Vivekananda was born on

- A) 2 OCT 1869 B) 4 JULY 1863
- C) 12 JAN 1863 D) 16 AUG 1863





48. This is not the photograph of Vivekananda

- A) 
- B) 
- C) 
- D) 

49. Narendra hates these items

- A) Superstitions B) Fear
- C) Both A & B D) None of these

50. Rama Krishna Parama Hamsa

- A) 
- B) 
- C) 
- D) 

Sponsored by
Sri Sai Communications
and Idea Distributors
K.G.Road, P.Dornala
(Prop: Vechha Satyanarayana)



Happy New Year
2015



By
T.S.O.

Prepared by :
9441786635

NAGA MURTHY- 9441786635
Contact at : nagamurthysir@gmail.com
Visit at : nagamurthy.weebly.com